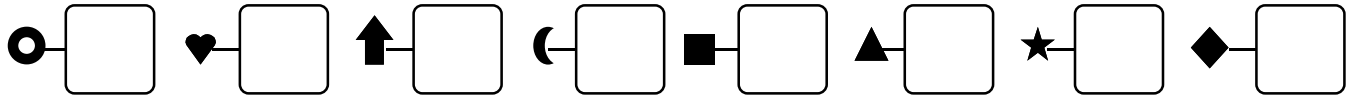
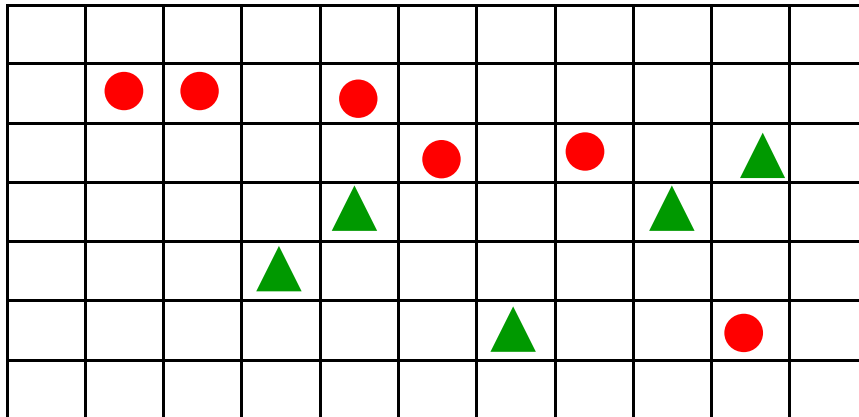


Date .....


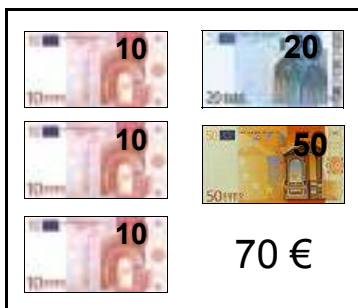

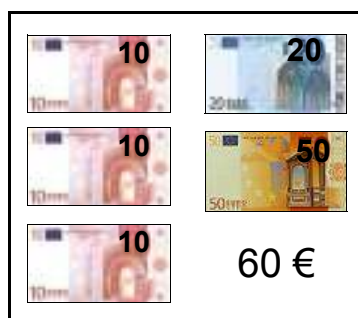
1 - **Écris** les nombres dictés :



2 - **Trace** un chemin fermé en suivant les lignes du quadrillage, tous les triangles à l'intérieur, les ronds à l'extérieurs :



3 - **Entoure** les billets utilisés pour former les sommes indiquées :



4 - **Complète** :

$30 + 20 = \dots\dots$	$30 + 30 = \dots\dots$	$20 + 40 = \dots\dots$	$30 + 60 = \dots\dots$
$50 + 20 = \dots\dots$	$30 + 40 = \dots\dots$	$20 + 20 + 20 = \dots\dots\dots$	
$10 + 30 + 10 = \dots\dots\dots$		$30 + 40 + 10 = \dots\dots\dots$	