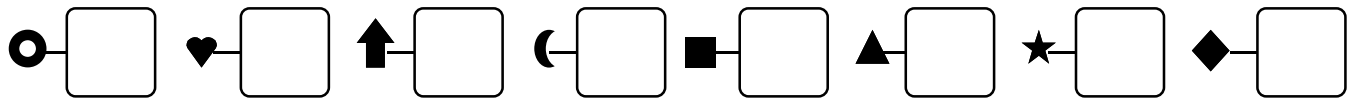
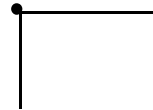


Date

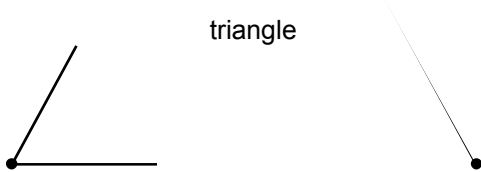
1 - **Écris** les nombres dictés :



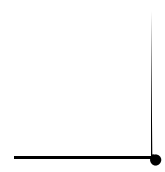
2 - **Trace** les figures commencées :



carré



triangle



3 - **Écris** le nom du plus cher au moins cher :



65 €



43 €



56 €



29 €

1)

2)




3)

4)

4 - **Entoure** les pièces et billets utilisés pour acheter la voiture:



39 €

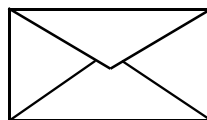


5 - **Complète** :



9

?



□

=



16