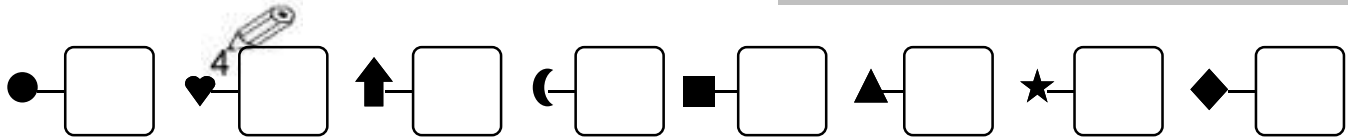


1 - **Écris** les nombres dictés :

Date .....



2 - **Entoure** les personnages qui ont obtenus 10 au total :



1 4 3 2

3 5 3

6 2 2

3 - **Complète** les additions :

$2 + 7 = \dots$

$2 + 1 + 3 = \dots$

$5 + 1 + 3 = \dots$

$5 + 4 = \dots$

$5 + 1 + 4 = \dots$


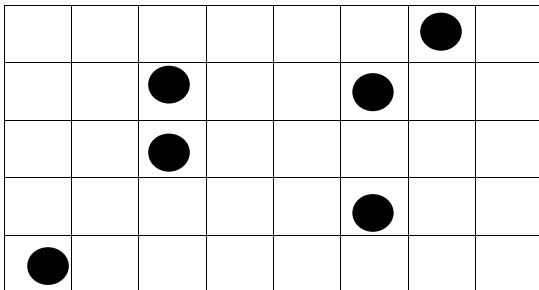
$5 + 1 + 5 = \dots$

$3 + 4 = \dots$

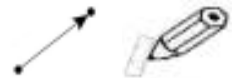
$2 + 2 + 2 = \dots$

$2 + 3 + 4 = \dots$

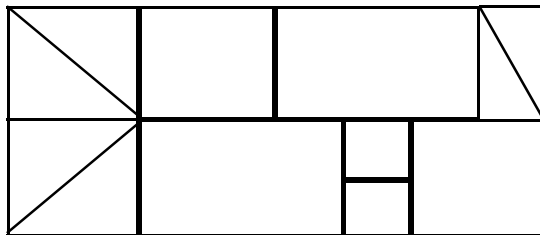
4 - **Reproduis** cette figure :



6 - Relie les points :



5 - **Colorie** en lisant les couleurs :



triangle orange carré violet rectangle rose

