

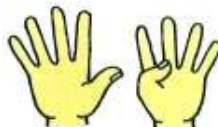



1 - **Écris**  les nombres dictés :

Date



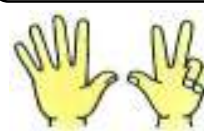
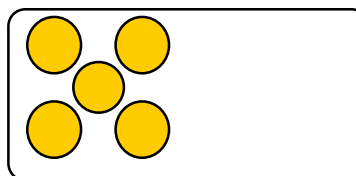
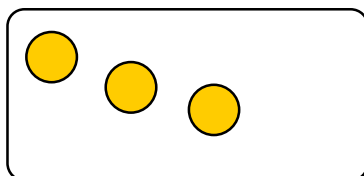

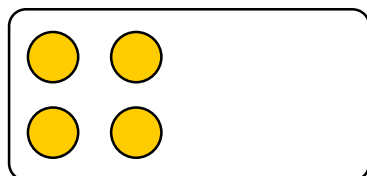
2 - **Entoure**  le bon nombre :



3 - **Écris**  le nombre des dessins :



4 - **Dessine**  les billes qui manquent :



5 - **Écris** :

1.
2.